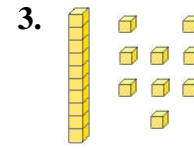
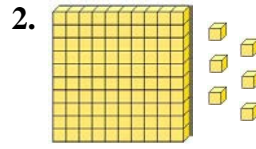
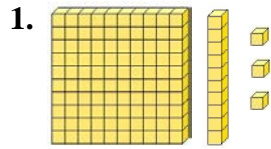


Lesson 1.1 ~ Place Value with Decimals

Name _____ Period _____ Date _____

Write the decimal that each base-ten block group represents.



In which place is the digit 7 in each decimal?

4. 42.709

5. 4.437

6. 28.271

Write the value of the underlined digit in each decimal.

7. 3.217

8. 52.109

9. 90.473

10. 65.18

11. 31.602

12. 47.236

Write a decimal to match each word form.

13. Twenty-two and seventy-four hundredths

14. Fifty-six and one hundredth

15. Four and five hundred thirty-six thousandths

16. Eighty-one and eight thousandths

Write each decimal in word form.

17. 6.902

18. 52.7

19. 0.089

20. 2.005